

The IQ test

Have you ever asked yourself, what is intelligence? Intelligence can be described as the ability to have skills, necessary to face the requirements and challenges, which man is daily confronted with. According to the Webster's Dictionary, "intelligence is a capacity to perceive and comprehend meaning, information, news".

Nowadays a new, more complex and extensive conception of intelligence has been developed, and the determination can be simply expressed as: Intelligence is a skill to solve complex problems in the changing circumstances. One cannot say, that IQ = Intelligence, because not all the aspects of the intelligence can be reliably measured. Intelligence can have different forms, co-existing with each other, and not all of them are easily measurable. Besides, sometimes it is difficult to place certain expressions of intelligence (like intuition) into one or another category.

Want to know more about the IQ and find out how smart you are? Reveal the intelligence mysteries on this page now! Take the **IQ test**!

Looking for other tests? More than 3,000 quizzes are waiting for you! [Click here to get to the challenge!](#) With this test you are about to learn the type of questions that you can expect from an

IQ test.

Please take your time. It is much more important to understand the questions than to answer them quickly. Have fun!

Let's start with the IQ test

The following tasks require you to analyse alphanumeric patterns built according to certain rules.

Question 1 of the iq test: Please enter the missing figure: 3 , 5, 8, 13, 21,

Question 2 of the iq test: Please enter the missing figure: 4, 5, 8, 17, 44,

Question 3 of the iq test: Please enter the missing figure: 3, 4, 8, 17, 33,

Question 4 of the iq test: Please enter the missing figure: 11, 9, 7, 5, 3,

Question 5 of the iq test: Please enter the missing figure: 3, 6, 18, 72, 360,

Question 6 of the iq test: Please enter the missing figure: 30, 29, 27, 26, 24, 23, 21, 20,

Question 7 of the iq test: Please enter the missing character: A, D, G, J,

Question 8 of the iq test: Please enter the missing character: D, G, K, N, R,

Question 9 of the iq test: Please enter the missing character: B, C, E, H, L,

[Word Plays](#)

Question 10 of the iq test:

Please insert the missing character to form two words: HUM ORK

Question 11 of the iq test:

Please insert the missing character to form two words: SLO IDE

Question 12 of the iq test:

Please insert the missing character to form two words: VEI ASER

Question 13 of the iq test:

Please mark the word not matching (meaning) the other words (odd one out):

☐ London ☐ Paris ☐ Dublin ☐ The Hague ☐ Vienna

Question 14 of the iq test:

Please mark the word not matching (meaning) the other words (odd one out):

☐ Whale ☐ Shark ☐ Herring ☐ Carp ☐ Pike

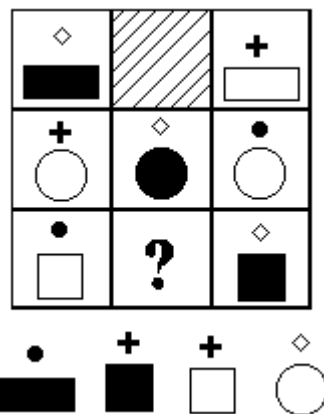
Question 15 of the iq test:

Please mark the word not matching (meaning) the other words (odd one out):

☐ Edgar Allan Poe ☐ Henry Adams ☐ Jack London ☐ Ernest Hemingway ☐ Daniel Defoe

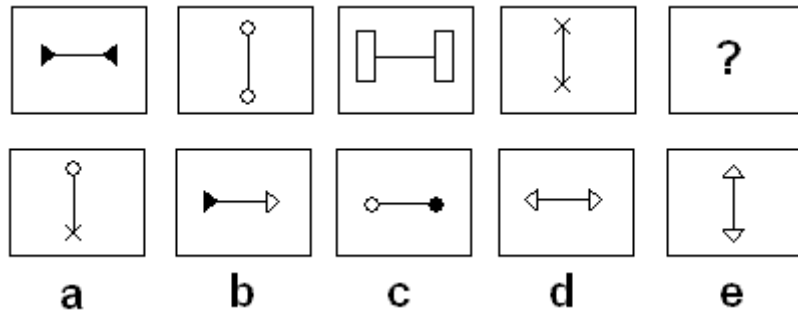
Series of Figures

Question 16 of the iq test: Please find the figure continuing the series:



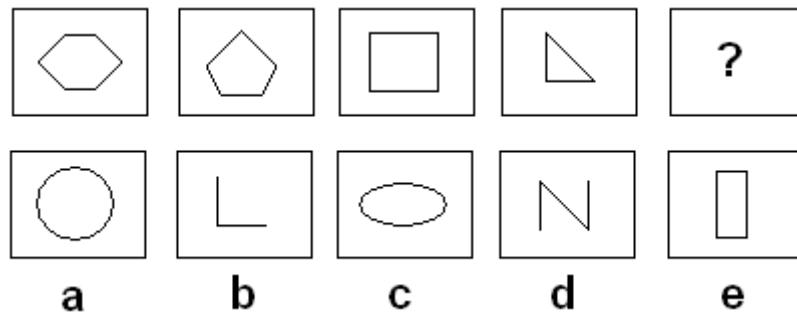
☐ a ☐ b ☐ c ☐ d

Question 17 of the iq test: Please find the figure continuing the series:



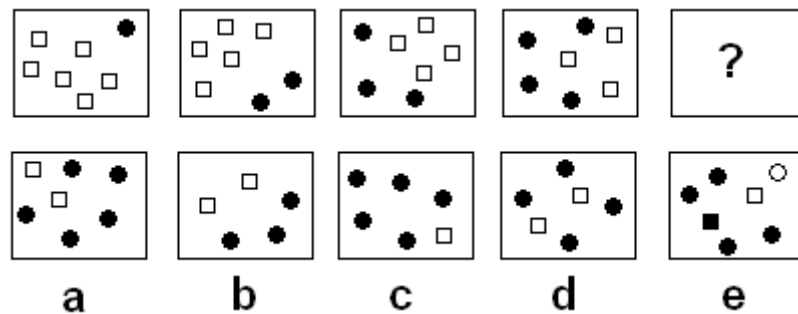
☐ a ☐ b ☐ c ☐ d ☐ e

Question 18 of the iq test: Please find the figure continuing the series:



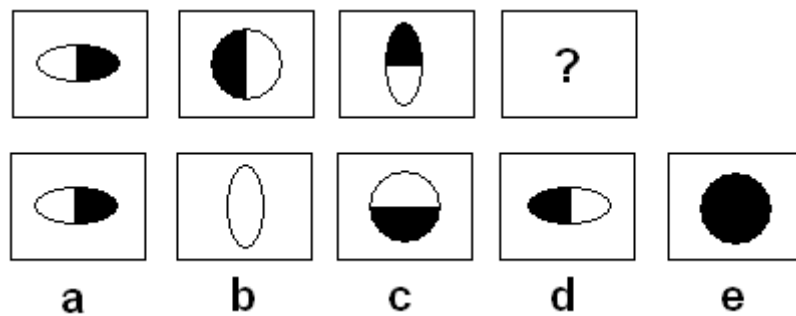
☐ a ☐ b ☐ c ☐ d ☐ e

Question 19 of the iq test: Please find the figure continuing the series:



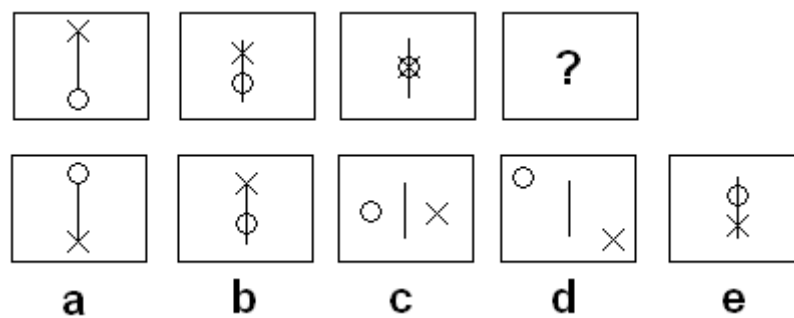
☐ a ☐ b ☐ c ☐ d ☐ e

Question 20 of the iq test: Please find the figure continuing the series:



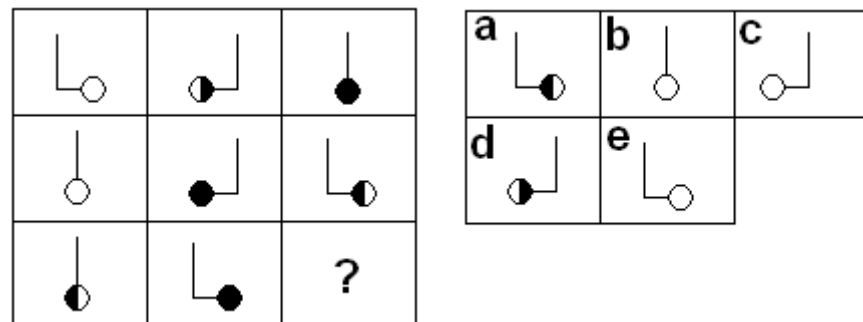
☐ a ☐ b ☐ c ☐ d ☐ e

Question 21 of the iq test: Please find the figure continuing the series:



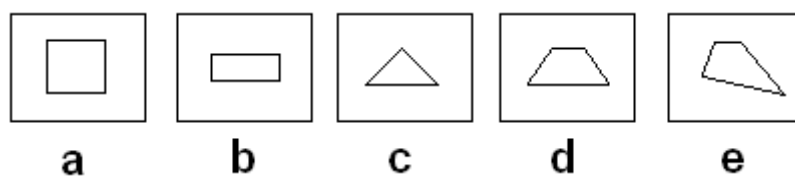
☐ a ☐ b ☐ c ☐ d ☐ e

Question 22 of the iq test: Please find the figure continuing the series:



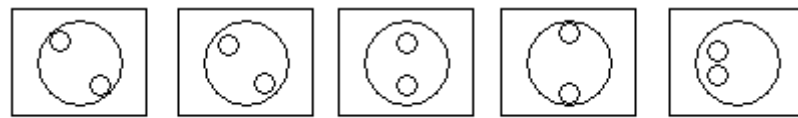
☐ a ☐ b ☐ c ☐ d ☐ e

Question 23 of the iq test: Please find the odd one: :



☐ a ☐ b ☐ c ☐ d ☐ e

Question 24 of the iq test: Please find the odd one:



a

b

c

d

e



a



b



c

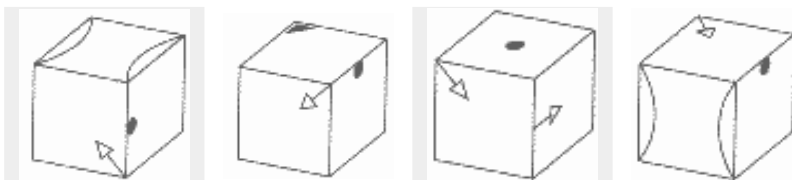
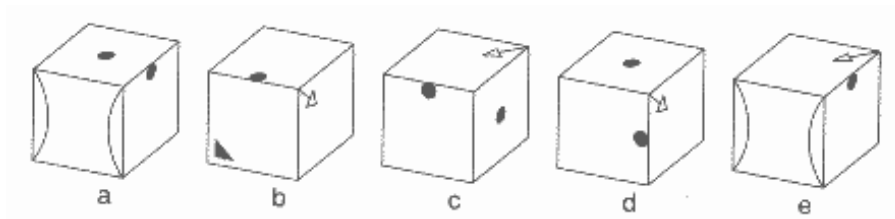


d



e

Find similar cubes. All of the sides of a given cube look different. Please mark the solution with at least two corresponding sides.



Question 25:



a



b



d



e

Question 26:



a



b



c



d

Question 27:



a



c



d



e

Question 28:



a



b



c



d

Logical Question: Which is the correct conclusion?

Question 29 of the iq test:

30 years ago it took a worker five hours to make a chair. Today it takes him just 30 minutes.



a) Man has become more industrious.



b) People work faster in order to avoid unemployment.



c) Chairs have a shorter life cycle.



d) Workers have more spare time.



e) Productivity has increased.

Question Drinking and Driving causes many accidents.

**30 of the
iq test:**

- ☐ a) People drink too much alcohol.
- ☐ b) People should not drive when over the legal limit.
- ☐ c) There is a 20 per cent chance of causing an accident by drunken driving.
- ☐ d) Alcohol diminishes driving skills.
- ☐ e) The police should carry out more breathanalysing tests.

Question

31 of the During the Christmas period toy shops increase their sales.
iq test:

- ☐ a) In winter time children like playing at home.
- ☐ b) Half of the Christmas presents are toys.
- ☐ c) During the Christmas period, people buy more toys.
- ☐ d) In winter more toys are produced.
- ☐ e) Toys for adults are becoming more and more popular.

Question

32 of the Today is Wednesday. What will the fourth day from yesterday be?
iq test:

- ☐ a) Sunday ☐ b) Monday ☐ c) Friday ☐ d) Thursday ☐ e) Saturday

Question

33 of the The day before the day before yesterday is three days after Saturday. What day is today?
iq test:

- ☐ a) Sunday ☐ b) Monday ☐ c) Friday ☐ d) Thursday ☐ e) Saturday

Question

34 of the Which lamp is the brightest?
iq test:

Lamp A is less bright than Lamp B

Lamp B is brighter than Lamp C

Lamp C is as bright as Lamp D

Lamp B is brighter than Lamp D

Lamp D is brighter than Lamp A

- ☐ Lamp A ☐ Lamp B ☐ Lamp C ☐ Lamp D ☐ no solution

Question

35 of the Who is the shortest?

iq test:

Oliver and Otto are the same height

Bert is shorter than Ben

Ben is taller than Otto

Oliver is shorter than Bert

☐ a) Oliver ☐ b) Otto ☐ c) Bert ☐ d) Ben ☐ e) no solution

Question 36 of the iq test: A trader buys tea for \$1200 and sells it for \$1500. Per sack of tea he makes a profit of \$50. How many sacks of tea did he have?

Question 37 of the iq test: 87 kg of potatoes are distributed in two boxes. One box weighs 11 kg less than the other one. How many kilograms of potatoes does the lighter box contain?

Question 38 of the iq test: What is the result of multiplying all figures from 0 to 25?

Score me

EXAMPLE OF SOLUTION

Looking for other tests? More than 3,000 quizzes are waiting for you! [Click here to get to the challenge!](#)

Question 1: Please enter the missing figure: 3, 5, 8, 13, 21, ...

Your Answers: 34

Right! Reason: The two previous numerals are added. Example: $3 + 5 = 8$ (solution 34) of the difference between the numbers is 2,3,5,8 and than 12, so $21+12=33$ (solution 33)

Question 2: Please enter the missing figure: 4, 5, 8, 17, 44, ...

Your Answers: 81

Wrong! The right answer is: 125. Reason: Multiply the previous numeral by 3 and deduct 7 from the result. Example: $4 \times 3 = 12$; $12 - 7 = 5$. Or $(4+3^0)=5$, $(5+3^1)=8$, $(8+3^2)=17$ $\implies (17+3^3)=44$

Question 3: Please enter the missing figure: 3, 4, 8, 17, 33, ...

Your Answers: 60

Wrong! The right answer is: 58. The starting numeral is 3 in position 1. The following numeral is $3 + (1 \times 1)$ Example: $8 + (3 \times 3) = 17$

Question 4: Please enter the missing figure: 11, 9, 7, 5, 3, ...

Your Answers: 1

Right! Reason: The sequence consists of the odd numerals descending from 11.

Question 5: Please enter the missing figure: 3, 6, 18, 72, 360, ...

Your Answers: 2160

Right! Reason: The following numeral is always the previous numeral multiplied by an integer. This numeral increases by 1 with each step. Example: $3 \times 2 = 6$; $6 \times 3 = 18$; $18 \times 4 = 72$; $72 \times 5 = 360$; $360 \times 6 = 2160$

Question 6: Please enter the missing figure: 30, 29, 27, 26, 24, 23, 21, 20, ...

Your Answers: 18

Right! Reason: Continuous descending sequence, with every third number missing.

Question 7: Please enter the missing character: A, D, G, J, ...

Your Answers: M

Right! Reason: Continuous descending sequence, with every third character missing: The following character is always three steps behind the previous character. Example: A, B, C, D, E, F, G, ...

Question 8: Please enter the missing character: D, G, K, N, R, ...

Your Answers: U

Right! Reason: The following character alternates between being two or three steps behind the previous character. Example: D, E, F, G, H, I, J, K, ...

Question 9: Please enter the missing character: B, C, E, H, L, ...

Your Answers: Q

Right! Reason: With every step the number of characters skipped increases by one. Example: B, C, D, E, F, G, H, ...

Question 10: Please insert the missing character to form two words: HUM ...ORK

Your Answers: W

Wrong! The right answer is: P. Reason: Hump; Pork

Question 11: Please insert the missing character to form two words: SLO...IDE

Your Answers: W

Right! Reason: (Slot - Tide) or (Slow - Wide) or (Slob - Bide)

Question 12: Please insert the missing character to form two words: VEI...ASER

Your Answers: L

Right! Reason: Veil; Laser

Question 13: Please mark the word not matching (meaning) the other words (odd one out): London, Paris, Dublin, The Hague, Vienna

Your Answers: The Hague

Right! Reason: The Hague is not a capital. Please do not send us any e-mail claiming that The Hague is the capital. The Hague is the centre of the Government, and the capital of

the Netherlands is Amsterdam. Please take our word for this!

Question 14: Please mark the word not matching (meaning) the other words (odd one out): Whale, Shark, Herring, Carp, Pike

Your Answers: Whale


Right! Reason: Whales are mammals.

Question 15: Please mark the word not matching (meaning) the other words (odd one out): Edgar Allan Poe, Henry Adams, Jack London, Ernest Hemingway, Daniel Defoe

Your Answers: Defoe

Right! Reason: Defoe was not an American writer.

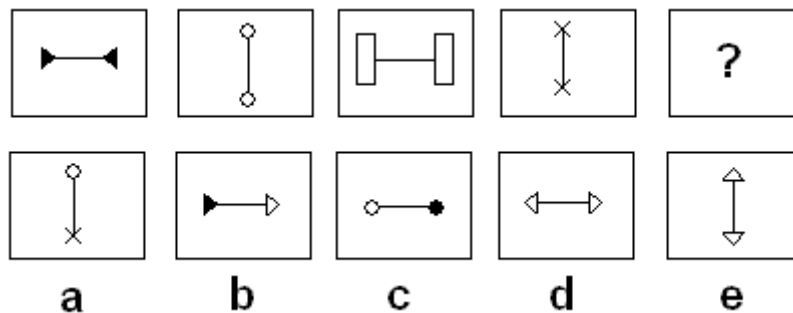
Question 16: Please find the figure continuing the series:



Your Answers: c

Right! Reason: The lowest objects are always identical. Therefore the lowest object has to be a large square. One of the objects is always hollow, the other one is not.

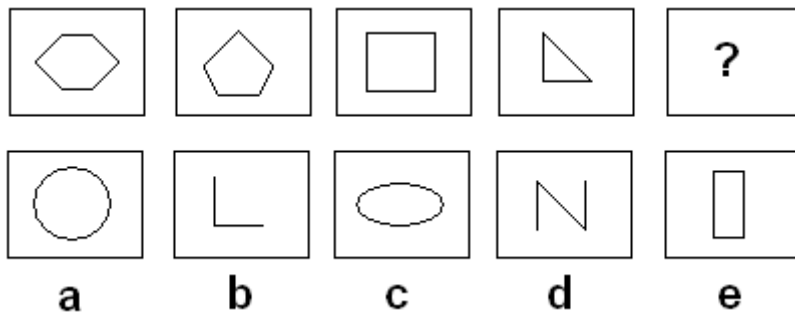
Question 17: Please find the figure continuing the series:



Your Answers: d

Right! Reason: The objects alternate between being in the horizontal and the vertical position. Both ends are always equal.

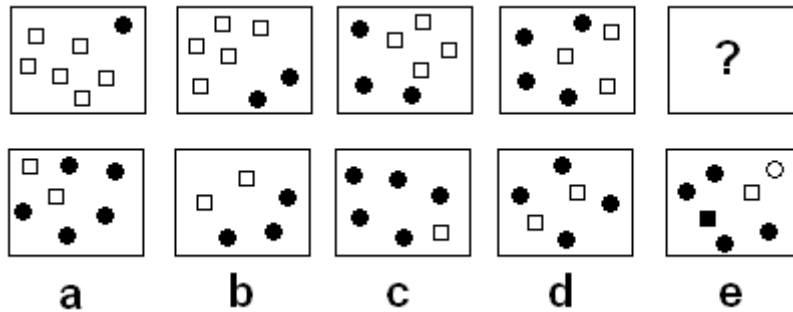
Question 18: Please find the figure continuing the series:



Your Answers: b

Right! Reason: Each object has one corner (solution d) or one line (solution b) less than the previous one.

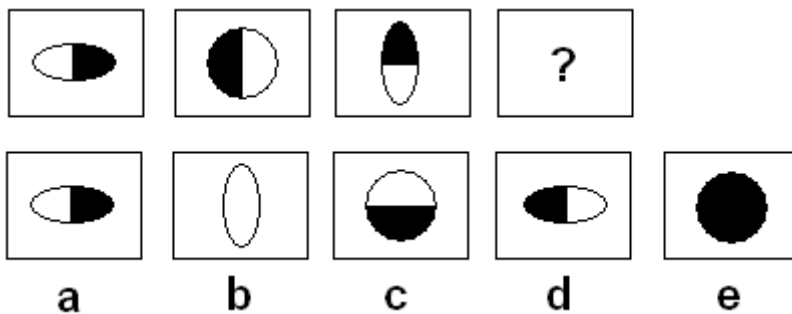
Question 19: Please find the figure continuing the series:



Your Answers: a

Right! Reason: The current picture always shows one square less than the previous picture. The current picture always shows one more circle than the previous picture.

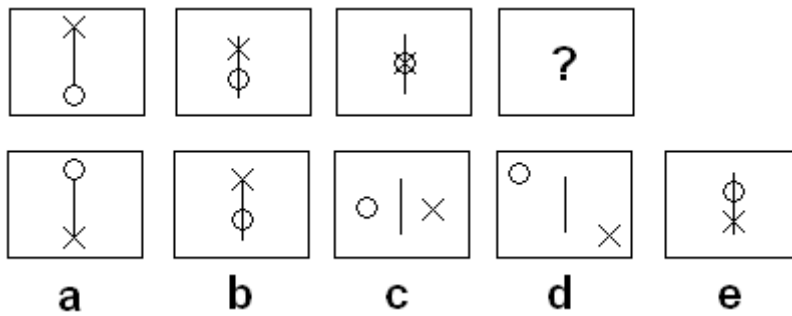
Question 20: Please find the figure continuing the series:



Your Answers: c

Right! Reason: First an ellipse, then a circle, then another ellipse - we are therefore dealing with a circle. As each figure is only half solid the answer must be c.

Question 21: Please find the figure continuing the series:

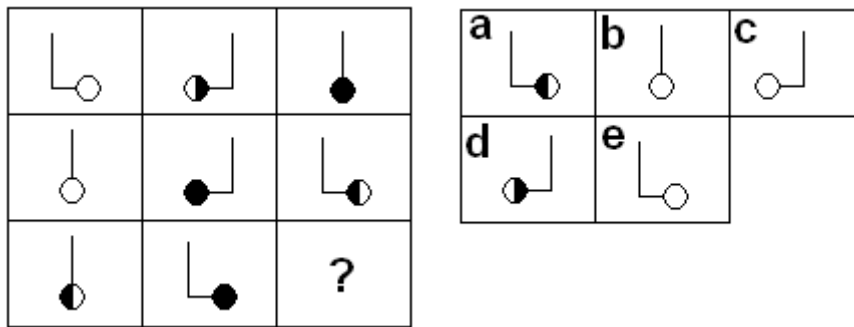


Your Answers: e

Right! Reason: The small figures are shifted upwards or downwards.

Question Please find the figure continuing the series:

22:

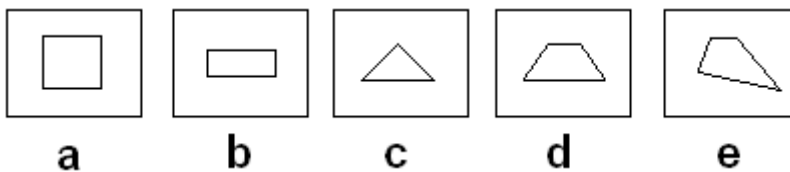


Your Answers: c

Right! Reason: In each row the signs point to a different direction. In addition, in each row one circle appears solid, one circle appears half solid, and one circle appears hollow.

Question Please find the odd one:

23:

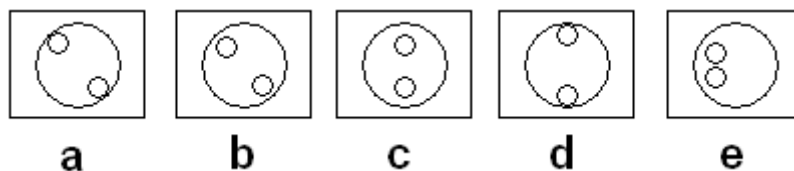


Your Answers: c

Right! Reason: All figures are rectangular, c is a triangle; e is also correct as it is the only figure that is not symmetrical.

Question Please find the odd one:

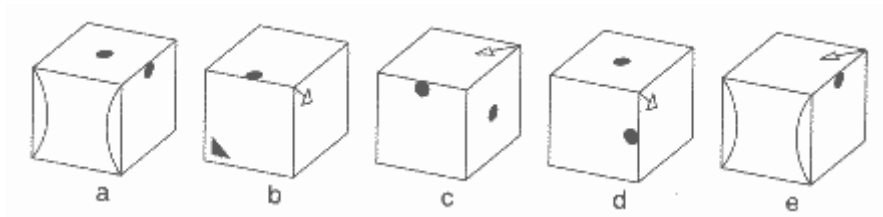
24:



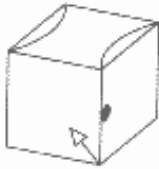
Your Answers: e

Right! Reason: The two small circles cannot be connected with a straight line running through the centre of the large circle.

Find similar cubes. All of the sides of a given cube look different. Please mark the solution with at least two corresponding sides.



**Question
25**



Your Answers: e

Wrong! The right answer is: d.

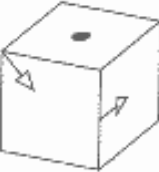
**Question
26**



Your Answers: b

Right!

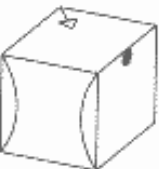
**Question
27**



Your Answers: d

Right!

**Question
28**



Your Answers: a

Wrong! The right answer is: c.

Question 29: 30 years ago it took a worker five hours to make a chair. Today it takes him just 30 minutes.

a Man has become more industrious.

b People work faster in order to avoid unemployment.

c Chairs have a shorter life cycle.

d Workers have more spare time.

e Productivity has increased.

Your Answers: d

Wrong! The right answer is: e. Reason: The four other statements are based on assumptions not made in the starting statement. Example: Answer b assumes high unemployment. This is not mentioned in the starting statement.

Question Drinking and Driving causes many accidents.

30:

- a People drink too much alcohol.
- b People should not drive when over the legal limit.
- c There is a 20 per cent chance of causing an accident by drunken driving.
- d Alcohol diminishes driving skills.
- e The police should carry out more breathanalysing tests.

Your Answers: b

Wrong! The right answer is: d. Reason: The four other statements are based on assumptions not made in the starting statement. Example: Answer b is based on a blood-alcohol limit. This is not mentioned in the starting statement.

Question During the Christmas period toy shops increase their sales.

31:

- a In winter time children like playing at home.
- b Half of the Christmas presents are toys.
- c During the Christmas period, people buy more toys.
- d In winter more toys are produced.
- e Toys for adults are becoming more and more popular.

Your Answers: c

Right! Reason: The four other statements are based on assumptions not made in the starting statement. Example: Answer b assumes that the percentage of toys as presents is known. This is not mentioned in the starting statement.

Question

32:

Today is Wednesday. What will the fourth day from yesterday be?

Your Answers: Saturday

Right! Reason: Yesterday was Tuesday. So in four days time it will be Saturday.

Question

33:

The day before the day before yesterday is three days after Saturday. What day is today?

Your Answers: Friday

Right! Reason: Three days after Saturday is Tuesday. Then the day before yesterday was Wednesday (Tuesday being the day before the day before yesterday). Therefore, today is Friday.

Question

34:

Which lamp is the brightest?

- Lamp A is less bright than Lamp B
- Lamp B is brighter than Lamp C
- Lamp C is as bright as Lamp D

Lamp B is brighter than Lamp D

Lamp D is brighter than Lamp A

Your Answers: b

Right! Reason: Please compare all statements with their respective solutions.

Question Who is the shortest?

35:

Oliver and Otto are the same height

Bert is shorter than Ben

Ben is taller than Otto

Oliver is shorter than Bert

Your Answers: e

Right! Reason: Oliver and Otto are equally small.

Question A trader buys tea for \$1200 and sells it for \$1500. Per sack of tea he makes a profit of

36: \$50. How many sacks of tea did he have?

Your Answers: 6

Right! Reason: $1500 - 1200 = 300$ $300 : 50 = 6$

Question 87 kg of potatoes are distributed in two boxes. One box weighs 11 kg less than the other

37: one. How many kilograms of potatoes does the lighter box contain?

Your Answers: 49

Wrong! The right answer is: 38. Reason: $38 \text{ kg} + 49 \text{ kg} = 87 \text{ kg}$ $49 \text{ kg} - 38 \text{ kg} = 11 \text{ kg}$

Question What is the result of multiplying all figures from 0 to 25?

38:

Your Answers: 0

Right! Reason: $0 * X = 0$

You have answered 30 questions out of 38 correctly. Your IQ is ~ 126.

If you want a verified IQ score, please try this tests:

[IQTestClub.com - the most relaxed IQ Test in the world!](http://www.iqtestclub.com)

[Emode's IQ Test](#)

[Free IQ Test!](#)

A score below 70 indicates that you performed way below the population average.

A score between 70 and 84 means that your performance on this test was significantly below the population average.

A score between 85 and 99 would put you slightly below the population average, but it's in the normal range.

A score of 100 represents the population average.

A score between 101 and 115 puts you above population average but is in the normal range.

A score between 116 and 130 means that your IQ might be significantly above average.

Scores of 130 and above mean that you are brilliant.

Fonte: <http://www.allthetests.com/tests/iq-test.php3>